



Determine which letter best represents the weight.

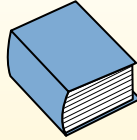
**Gram (g)**

A gram is about the weight of a paperclip.



**Kilogram (kg)**

A kilogram is about the weight of a thick book.



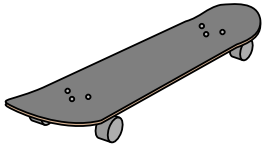
**Remember:**

Kilo means 1,000. So a kilogram is 1,000 grams.  
1 Kilogram is also about the same weight as 2 pounds.

**Answers**

1. \_\_\_\_\_
2. \_\_\_\_\_
3. \_\_\_\_\_
4. \_\_\_\_\_
5. \_\_\_\_\_
6. \_\_\_\_\_
7. \_\_\_\_\_
8. \_\_\_\_\_
9. \_\_\_\_\_

1)



Skateboard

- A. 20 grams
- B. 200 grams
- C. 15 kilograms
- D. 2 kilograms

2)



Shovel

- A. 1 gram
- B. 5 kilograms
- C. 10 grams
- D. 30 kilograms


3)



Candle

- A. 4 grams
- B. 10 kilograms
- C. 500 grams
- D. 2 kilograms

4)



Beetle

- A. 500 grams
- B. 1 gram
- C. 2 kilograms
- D. 5000 grams

5)



Spider

- A. 1 gram
- B. 15 grams
- C. 500 grams
- D. 1 kilogram

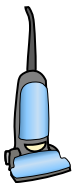
6)



Glue Stick

- A. 1 gram
- B. 500 grams
- C. 1 kilogram
- D. 62 grams

7)



Vacuum

- A. 500 kilograms
- B. 50 grams
- C. 90 grams
- D. 20 kilograms


8)



Recliner

- A. 90 grams
- B. 1 kilogram
- C. 150 grams
- D. 35 kilograms

9)



Battery

- A. 15 grams
- B. 10 kilograms
- C. 1 gram
- D. 90 kilograms



Determine which letter best represents the weight.


**Gram (g)**

A gram is about the weight of a paperclip.



**Kilogram (kg)**

A kilogram is about the weight of a thick book.



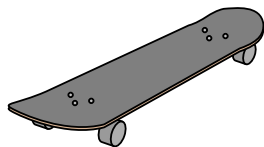
**Remember:**

Kilo means 1,000. So a kilogram is 1,000 grams.

1 Kilogram is also about the same weight as 2 pounds.

**Answers**

1)



Skateboard

- A. 20 grams
- B. 200 grams
- C. 15 kilograms
- D. 2 kilograms

2)



Shovel

- A. 1 gram
- B. 5 kilograms
- C. 10 grams
- D. 30 kilograms


3)



Candle

- A. 4 grams
- B. 10 kilograms
- C. 500 grams
- D. 2 kilograms


4)



Beetle

- A. 500 grams
- B. 1 gram
- C. 2 kilograms
- D. 5000 grams

5)



Spider

- A. 1 gram
- B. 15 grams
- C. 500 grams
- D. 1 kilogram

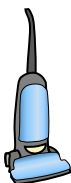
6)



Glue Stick

- A. 1 gram
- B. 500 grams
- C. 1 kilogram
- D. 62 grams


7)



Vacuum

- A. 500 kilograms
- B. 50 grams
- C. 90 grams
- D. 20 kilograms

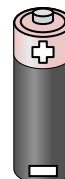
8)



Recliner

- A. 90 grams
- B. 1 kilogram
- C. 150 grams
- D. 35 kilograms

9)



Battery

- A. 15 grams
- B. 10 kilograms
- C. 1 gram
- D. 90 kilograms

- 1. **D**
- 2. **B**
- 3. **A**
- 4. **B**
- 5. **A**
- 6. **D**
- 7. **D**
- 8. **D**
- 9. **A**